

Name: _____

Date: _____




GENIUSCHALLENGE


TELL TIME (NEAREST MINUTE)

1. Write the time shown on the clock.

a.




b.




2. Draw the minute hand on the clock to show the correct time.

a. 2:55



b. 5:38



3. The bus comes at the time shown on the digital clock.
Draw the hands on the analog clock to show the same time.

